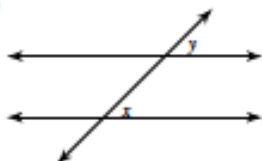


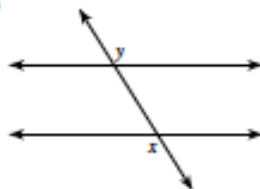
# Geometry    Transversal Angle Names    Name \_\_\_\_\_

Identify each pair of angles as corresponding, alternate interior, alternate exterior, or consecutive interior.

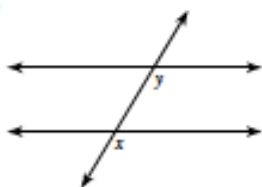
1)



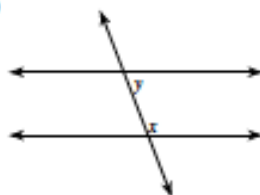
2)



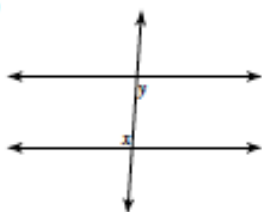
3)



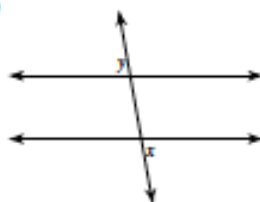
4)



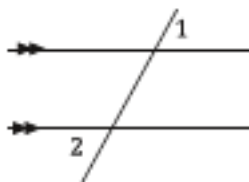
5)



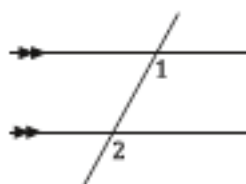
6)



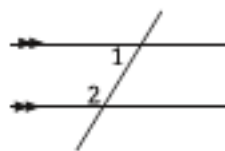
5.



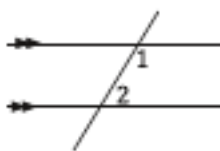
7.



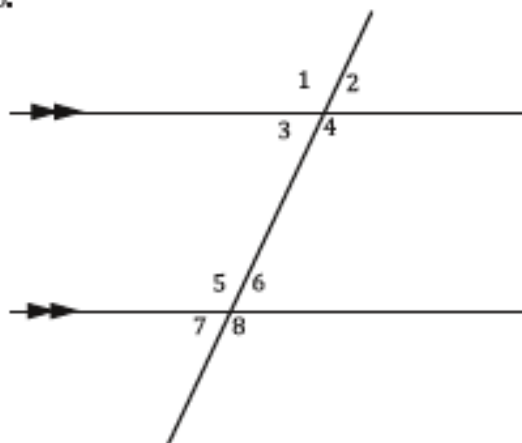
8.



9.



For our first exercise, bubble the correct answer choice for each item below. Refer to the previous pages if you need to.



1.  $\angle 1$  and  $\angle 5$  are\_\_

- A. Corresponding
- B. Alternate Interior
- C. Alternate Exterior
- D. Consecutive

2.  $\angle 8$  and  $\angle 4$  are\_\_

- A. Corresponding
- B. Alternate Interior
- C. Alternate Exterior
- D. Consecutive

3.  $\angle 2$  and  $\angle 7$  are\_\_

- A. Corresponding
- B. Alternate Interior
- C. Alternate Exterior
- D. Consecutive

4.  $\angle 3$  and  $\angle 6$  are\_\_

- A. Corresponding
- B. Alternate Interior
- C. Alternate Exterior
- D. Consecutive

5.  $\angle 6$  and  $\angle 4$  are\_\_

- A. Corresponding
- B. Alternate Interior
- C. Alternate Exterior
- D. Consecutive

6.  $\angle 2$  and  $\angle 6$  are\_\_

- A. Corresponding
- B. Alternate Interior
- C. Alternate Exterior
- D. Consecutive

7.  $\angle 4$  and  $\angle 5$  are\_\_

- A. Corresponding
- B. Alternate Interior
- C. Alternate Exterior
- D. Consecutive

8.  $\angle 1$  and  $\angle 8$  are\_\_

- A. Corresponding
- B. Alternate Interior
- C. Alternate Exterior
- D. Consecutive

9.  $\angle 3$  and  $\angle 5$  are\_\_

- A. Corresponding
- B. Alternate Interior
- C. Alternate Exterior
- D. Consecutive

10.  $\angle 4$  and  $\angle 8$  are\_\_

- A. Corresponding
- B. Alternate Interior
- C. Alternate Exterior
- D. Consecutive

Great Job, these are tough to remember which is which. If you are struggling, go back and try to memorize what each one looks like. (like remembering a picture) If you do that these will become very easy. Let's do some more!

Bubble the correct answer choice from each item above.

#1.	#2.	#3.	#4.	#5.	#6.	#7.	#8.	#9.	#10.
<input type="radio"/> A.	<input type="radio"/> A.	<input type="radio"/> A.	<input type="radio"/> A.	<input type="radio"/> A.	<input type="radio"/> A.	<input type="radio"/> A.	<input type="radio"/> A.	<input type="radio"/> A.	<input type="radio"/> A.
<input type="radio"/> B.	<input type="radio"/> B.	<input type="radio"/> B.	<input type="radio"/> B.	<input type="radio"/> B.	<input type="radio"/> B.	<input type="radio"/> B.	<input type="radio"/> B.	<input type="radio"/> B.	<input type="radio"/> B.
<input type="radio"/> C.	<input type="radio"/> C.	<input type="radio"/> C.	<input type="radio"/> C.	<input type="radio"/> C.	<input type="radio"/> C.	<input type="radio"/> C.	<input type="radio"/> C.	<input type="radio"/> C.	<input type="radio"/> C.
<input type="radio"/> D.	<input type="radio"/> D.	<input type="radio"/> D.	<input type="radio"/> D.	<input type="radio"/> D.	<input type="radio"/> D.	<input type="radio"/> D.	<input type="radio"/> D.	<input type="radio"/> D.	<input type="radio"/> D.